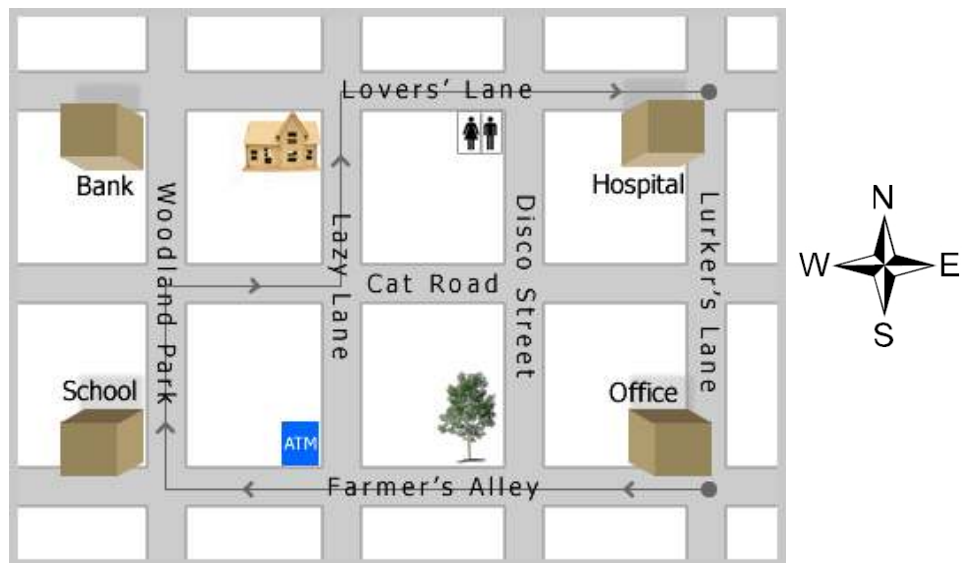


# Adam's Journey



1) Where did Adam start his journey? (Tick 3 boxes)

- |   |                          |  |                          |
|---|--------------------------|--|--------------------------|
| a) Next to the office.                                | <input type="checkbox"/> | d) The corner of <i>Lurker's</i> and <i>Farmer's</i> . | <input type="checkbox"/> |
| b) Next to the tree.                                  | <input type="checkbox"/> | e) The <i>Disco-Farmer's</i> intersection.             | <input type="checkbox"/> |
| c) The corner of <i>Lurker's</i> and <i>Lovers'</i> . | <input type="checkbox"/> | f) The <i>Lurker's-Farmer's</i> intersection.          | <input type="checkbox"/> |

2) Which way did he go first? (Tick one box)

- |   |                          |
|---|--------------------------|
| a) He headed east along <i>Farmer's Alley</i> and took the 4 <sup>th</sup> right. | <input type="checkbox"/> |
| b) He headed west along <i>Farmer's Alley</i> and took the 4 <sup>th</sup> right. | <input type="checkbox"/> |
| c) He headed east along <i>Farmer's Alley</i> and took the 3 <sup>rd</sup> right. | <input type="checkbox"/> |
| d) He headed west along <i>Farmer's Alley</i> and took the 3 <sup>rd</sup> right. | <input type="checkbox"/> |

3) Which turns did he make next? (Tick one box)

- |   |                          |
|---|--------------------------|
| a) He took the 1 <sup>st</sup> right, followed by the 1 <sup>st</sup> left. | <input type="checkbox"/> |
| b) He took the 1 <sup>st</sup> right, followed by the 1 <sup>st</sup> up.   | <input type="checkbox"/> |
| c) He took the 2 <sup>nd</sup> right, followed by the 2 <sup>nd</sup> up.   | <input type="checkbox"/> |
| d) He took the 2 <sup>nd</sup> right, followed by the 2 <sup>nd</sup> left. | <input type="checkbox"/> |

4) Finally, what happened? (Tick 3 boxes)

- |  |                          |
|--|--------------------------|
| a) The journey ended at the corner of <i>Disco</i> and <i>Lovers'</i> .    | <input type="checkbox"/> |
| b) The journey ended at the corner of <i>Lurker's</i> and <i>Lovers'</i> . | <input type="checkbox"/> |
| c) The journey finished at the <i>Lurker's-Lovers'</i> intersection.       | <input type="checkbox"/> |
| d) The journey finished at the <i>Lurker's-Cat</i> intersection.           | <input type="checkbox"/> |
| e) He arrived at the hospital.   | <input type="checkbox"/> |
| f) He arrived at the toilets.  | <input type="checkbox"/> |

# Final Destination



Listen to the directions and then tick the place you end up at.

- 1)
 

The bank	<input type="checkbox"/>	The school	<input type="checkbox"/>
The house	<input type="checkbox"/>	The ATM	<input type="checkbox"/>
The toilets	<input type="checkbox"/>	The tree	<input type="checkbox"/>
The hospital	<input type="checkbox"/>	The office	<input type="checkbox"/>
  
- 2)
 

The bank	<input type="checkbox"/>	The school	<input type="checkbox"/>
The house	<input type="checkbox"/>	The ATM	<input type="checkbox"/>
The toilets	<input type="checkbox"/>	The tree	<input type="checkbox"/>
The hospital	<input type="checkbox"/>	The office	<input type="checkbox"/>
  
- 3)
 

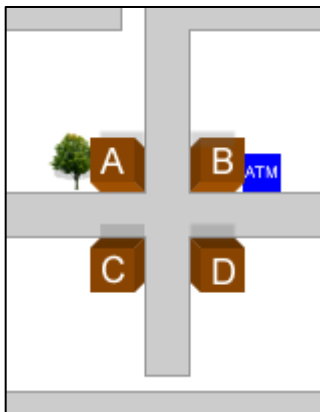
The bank	<input type="checkbox"/>	The school	<input type="checkbox"/>
The house	<input type="checkbox"/>	The ATM	<input type="checkbox"/>
The toilets	<input type="checkbox"/>	The tree	<input type="checkbox"/>
The hospital	<input type="checkbox"/>	The office	<input type="checkbox"/>

# Where is it exactly?

There are 6 prepositions below (3 of these are synonyms). Fill each gap with a different preposition.

## Prepositions:

- Opposite / across from
- Diagonally opposite / diagonally across from
- Next to / beside

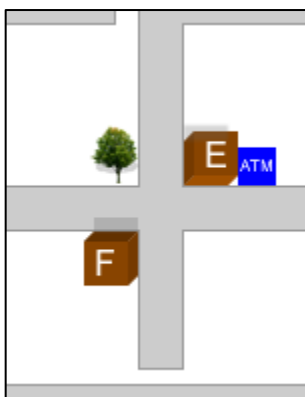


1. Building A is \_\_\_\_\_ a tree.
2. Building A is \_\_\_\_\_ building B.
3. Building A is \_\_\_\_\_ building D.
4. Building B is \_\_\_\_\_ building D.
5. Building B is \_\_\_\_\_ an ATM.
6. Building B is \_\_\_\_\_ building C.

Fill the gaps using the places below.


## Nouns:

- Building E
- Building F
- An ATM
- A tree
- Nothing



7. Building E is next to \_\_\_\_\_.
8. Building E is opposite \_\_\_\_\_.
9. Building E is diagonally opposite \_\_\_\_\_.
10. Building F is next to \_\_\_\_\_.
11. Building F is opposite \_\_\_\_\_.
12. Building F is diagonally opposite \_\_\_\_\_.

# Explore *New Town*



## Buildings key:

- A:** High School
- B:** Coffee shop
- C:** Hospital
- D:** Police station
- E:** Supermarket
- F:** Nightclub
- G:** Fire station
- H:** Convenience store
- I:** Bus station
- J:** Swimming pool
- K:** Clothes Shop
- L:** Offices
- M:** Prison
- N:** Bar
- O:** Chinese restaurant
- P:** Cake shop
- Q:** Gym
- R:** Japanese restaurant
- S:** Public toilets
- T:** Shopping centre
- U:** Pizza parlor
- V:** Italian restaurant
- W:** Pharmacy
- X:** Bank
- Y:** Church
- Z:** Post office

Listen to the directions for each journey. Then write down the name (not the letter) of the building you end up in.

Journey 1: \_\_\_\_\_

Journey 2: \_\_\_\_\_

Journey 3: \_\_\_\_\_

Journey 4: \_\_\_\_\_